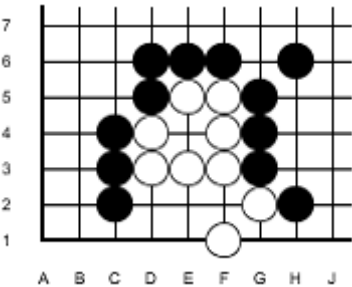
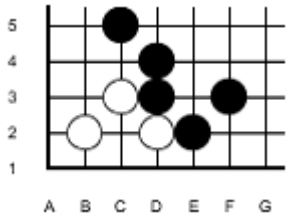
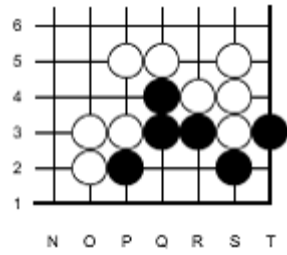
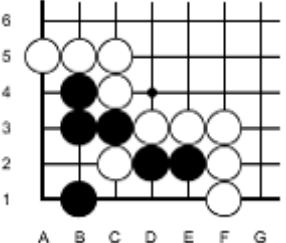
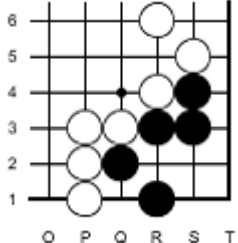
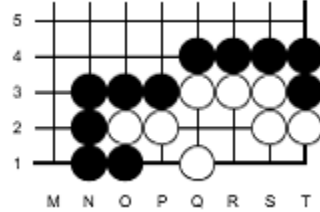
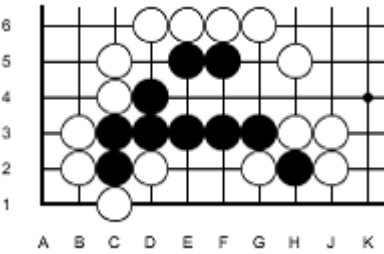
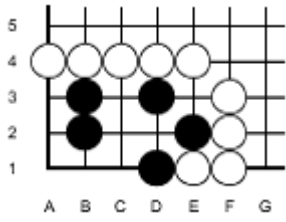
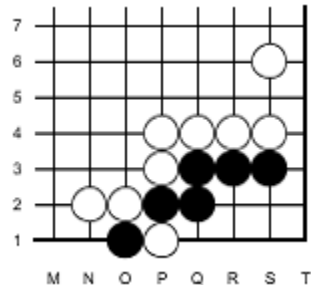
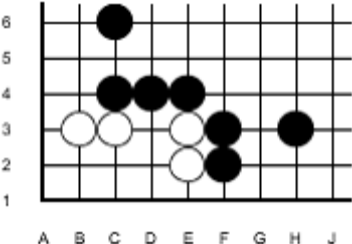
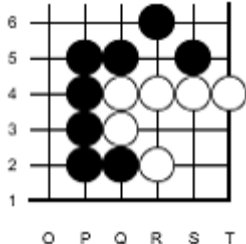
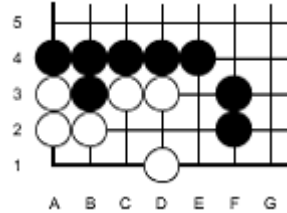


Test - K49 - Volume 4 Set C

 <p>7 6 5 4 3 2 1</p> <p>A B C D E F G H J</p>	 <p>5 4 3 2 1</p> <p>A B C D E F G</p>	 <p>6 5 4 3 2 1</p> <p>N O P Q R S T</p>	
1 Black to play and kill white - no ko please. (# 216)	2 What is black's best move? (# 214)	3 Black to live. (# 166)	
 <p>6 5 4 3 2 1</p> <p>A B C D E F G</p>	 <p>6 5 4 3 2 1</p> <p>O P Q R S T</p>	 <p>5 4 3 2 1</p> <p>M N O P Q R S T</p>	
4 Black to play and live (# 147)	5 Black to live (# 149)	6 Black to kill (# 201)	
 <p>6 5 4 3 2 1</p> <p>A B C D E F G H J K</p>	 <p>5 4 3 2 1</p> <p>A B C D E F G</p>	 <p>7 6 5 4 3 2 1</p> <p>M N O P Q R S T</p>	
7 Black to play (# 164)	8 Black to live (# 180)	9 Black to play and live. The stone at 0-1 is important. (# 151)	
 <p>6 5 4 3 2 1</p> <p>A B C D E F G H J</p>	 <p>6 5 4 3 2 1</p> <p>O P Q R S T</p>	 <p>5 4 3 2 1</p> <p>A B C D E F G</p>	
10 Black to kill white. (# 192)	11 Black's best move? (#223)	12 Where is the vital point for Black? (# 220)	

Name _____ Date _____ Time _____ Score _____